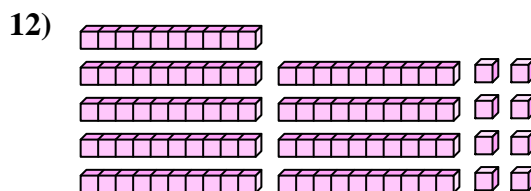
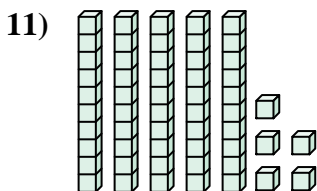
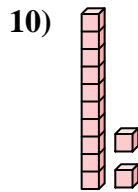
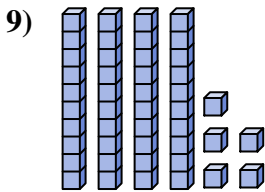
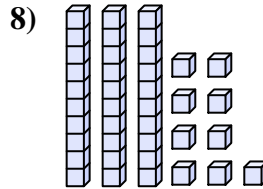
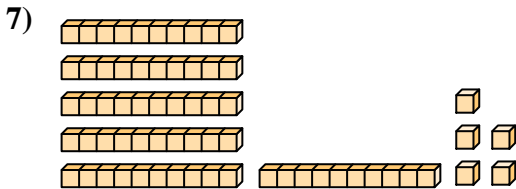
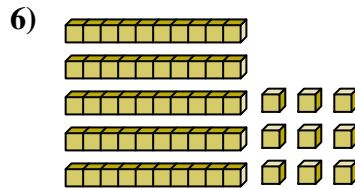
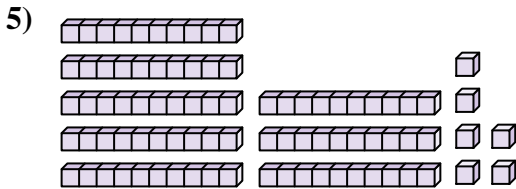

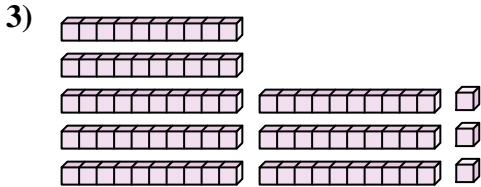
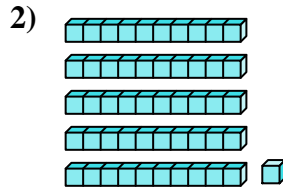
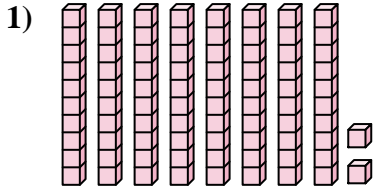




Count the total number of small blocks.

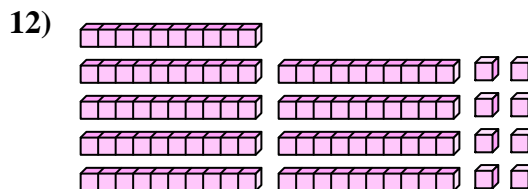
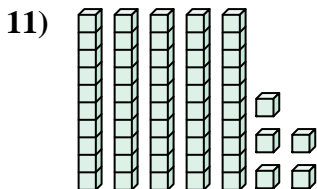
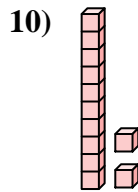
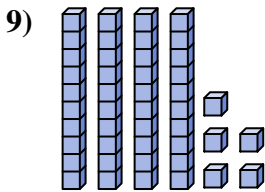
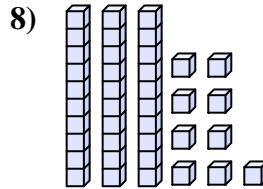
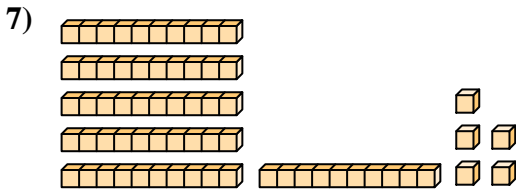
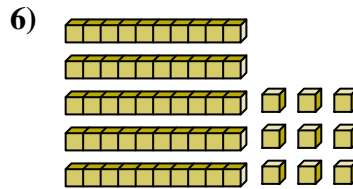
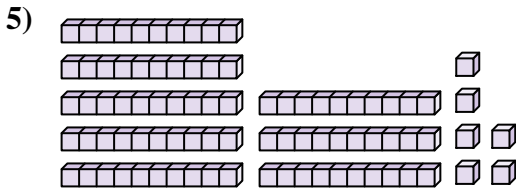

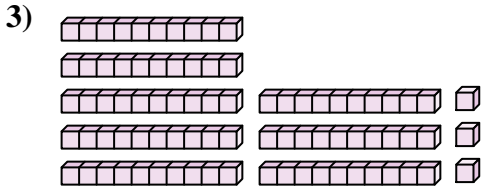
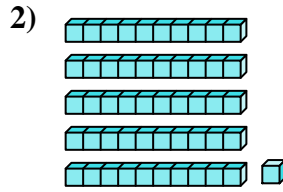

Answers



- 1. \_\_\_\_\_
- 2. \_\_\_\_\_
- 3. \_\_\_\_\_
- 4. \_\_\_\_\_
- 5. \_\_\_\_\_
- 6. \_\_\_\_\_
- 7. \_\_\_\_\_
- 8. \_\_\_\_\_
- 9. \_\_\_\_\_
- 10. \_\_\_\_\_
- 11. \_\_\_\_\_
- 12. \_\_\_\_\_



Count the total number of small blocks.



Answers

1. 82

2. 51

3. 83

4. 54

5. 86

6. 59

7. 65

8. 39

9. 45

10. 12

11. 55

12. 98



Count the total number of small blocks.

51

45

54

39

65

86

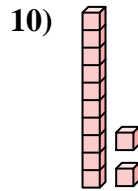
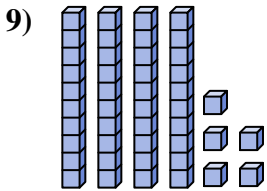
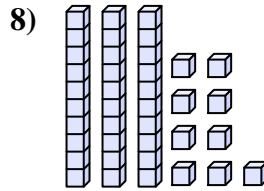
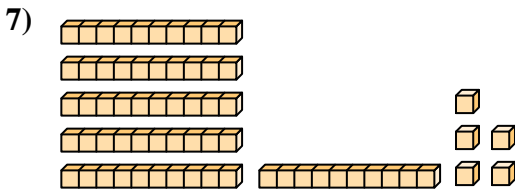
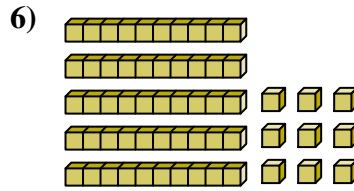
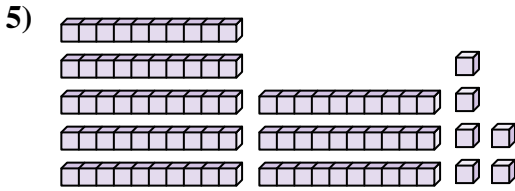

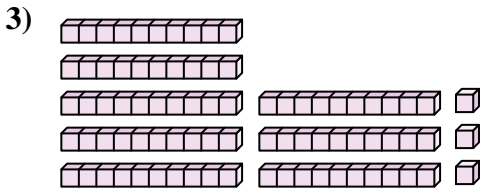
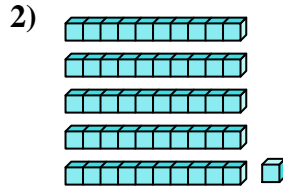
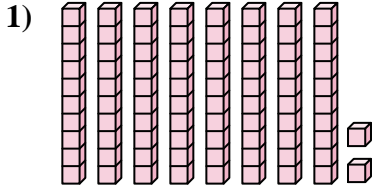
59

82

12

83

**Answers**



1. \_\_\_\_\_
2. \_\_\_\_\_
3. \_\_\_\_\_
4. \_\_\_\_\_
5. \_\_\_\_\_
6. \_\_\_\_\_
7. \_\_\_\_\_
8. \_\_\_\_\_
9. \_\_\_\_\_
10. \_\_\_\_\_